

## Rounding to the nearest whole number

Master  
The  
Basics



Use the number lines to answer these questions.

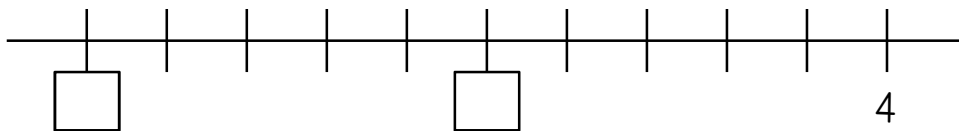
Mark each number on the line, then show if it stays or rounds up.

- 1) Round 4.2 to the nearest whole number.



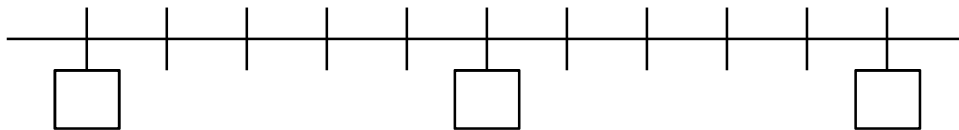
Answer:

- 2) Round 3.6 to the nearest whole number.



Answer:

- 3) Round 5.8 to the nearest whole number.



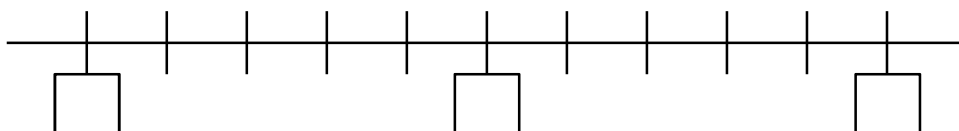
Answer:

- 4) Round 2.36 to the nearest whole number.



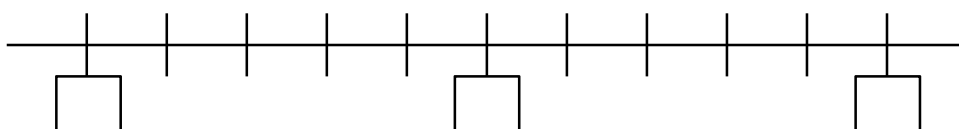
Answer:

- 5) Round 7.62 to the nearest whole number.



Answer:

- 6) Round 2.5 to the nearest whole number.



Answer:

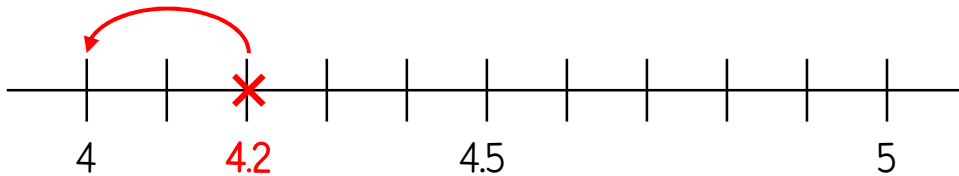
## Rounding to the nearest whole number



Use the number lines to answer these questions.

Mark each number on the line, then show if it stays or rounds up.

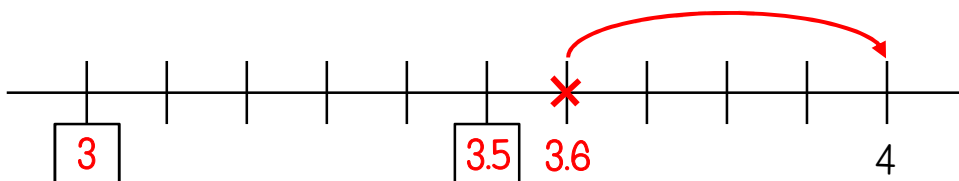
1) Round 4.2 to the nearest whole number.



Answer:

4

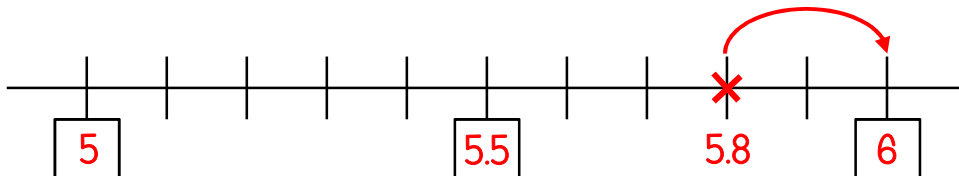
2) Round 3.6 to the nearest whole number.



Answer:

4

3) Round 5.8 to the nearest whole number.



Answer:

6

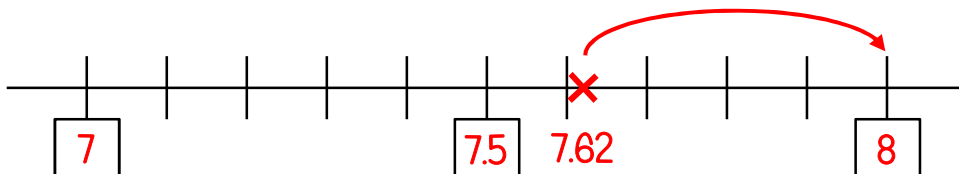
4) Round 2.36 to the nearest whole number.



Answer:

2

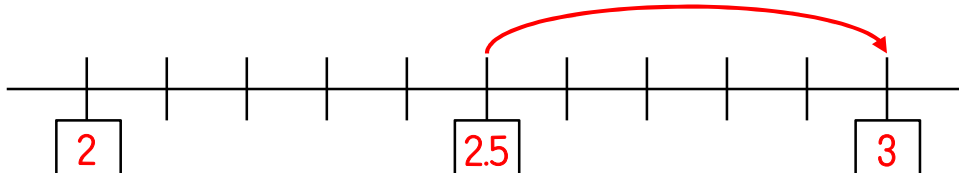
5) Round 7.62 to the nearest whole number.



Answer:

8

6) Round 2.5 to the nearest whole number.



Answer:

3